




① Farv den del af figuren som står under.



$$\frac{4}{8}$$




$$\frac{6}{8}$$




$$\frac{2}{6}$$

Hvor stor en del er farvet?




_____ eller _____



_____ eller _____

② $\frac{3138}{6} = \underline{\underline{\hspace{2cm}}}$ $\frac{17090}{5} = \underline{\underline{\hspace{2cm}}}$ $\frac{22778}{7} = \underline{\underline{\hspace{2cm}}}$

③ Hvor mange cm^2 er der



④ Tegn på bagsiden en
 bagsiden en
 Fin forårsblomst,
 en fugl og en
 regnorm!