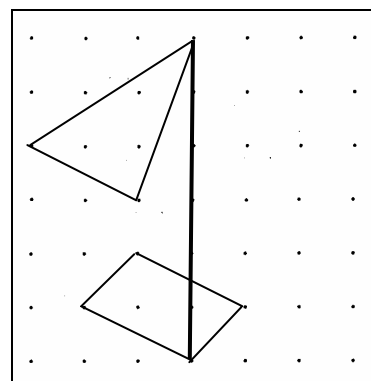
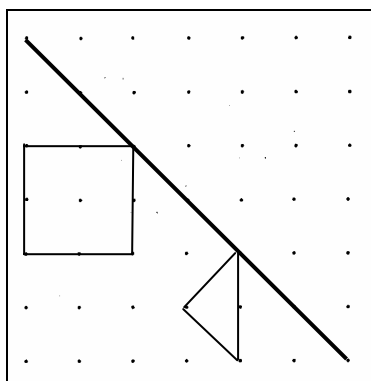
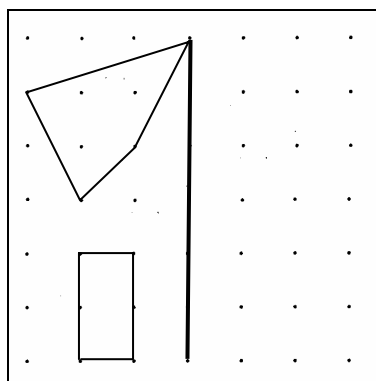


**Spejl sømbrætsfigurerne**



**Regn stykkerne**

|  |  |  |   |  |  |   |  |
|--|--|--|---|--|--|---|--|
| $\begin{array}{r} 67 \\ + 11 \\ \hline \hline \end{array}$ | $\begin{array}{r} 34 \\ + 85 \\ \hline \hline \end{array}$ | $\begin{array}{r} 4328 \\ + 471 \\ \hline \hline \end{array}$  | $\begin{array}{r} 274 \\ + 25 \\ \hline \hline \end{array}$   | $\begin{array}{r} 845 \\ + 154 \\ \hline \hline \end{array}$ | $\begin{array}{r} 39 \\ + 15 \\ \hline \hline \end{array}$ | $\begin{array}{r} 185 \\ + 21 \\ \hline \hline \end{array}$ | $\begin{array}{r} 367 \\ + 633 \\ \hline \hline \end{array}$ |
| $\begin{array}{r} 67 \\ - 11 \\ \hline \hline \end{array}$ | $\begin{array}{r} 85 \\ - 34 \\ \hline \hline \end{array}$ | $\begin{array}{r} 2222 \\ - 1111 \\ \hline \hline \end{array}$ | $\begin{array}{r} 6826 \\ - 826 \\ \hline \hline \end{array}$ | $\begin{array}{r} 45 \\ - 6 \\ \hline \hline \end{array}$    | $\begin{array}{r} 45 \\ - 16 \\ \hline \hline \end{array}$ | $\begin{array}{r} 45 \\ - 27 \\ \hline \hline \end{array}$  | $\begin{array}{r} 143 \\ - 53 \\ \hline \hline \end{array}$  |

**Tæl figurerne**

Tæl figurerne og skriv hvor mange der er af hver slags

| Figur | Antal |
|-------|-------|
|       |       |
|       |       |
|       |       |
|       |       |
|       |       |
|       |       |

**Skriv logbog**

Hvilke værksteder har du arbejdet med i denne uge? Se i din matematiklogbog for ugen og skriv det her:

-----

-----